













Name _____

A PET SCHEDULE

Marisol feeds her cat two meals a day. She also gives snacks and makes sure that the cat has water to drink. Look at the chart.



Feeding a Cat

 Breakfast 	 Water 	 Snack 
 Water 	 Dinner 	 Water 

Use the chart to answer the questions below.

1. At what time does the cat eat breakfast? _____ : _____ a.m.
2. At what time does the cat eat a snack? _____ : _____ p.m.
3. What does the cat get at 6:00 p.m.? _____
4. What does the cat get before bedtime? _____
5. How many times a day does the girl fill her cat's bowl? _____